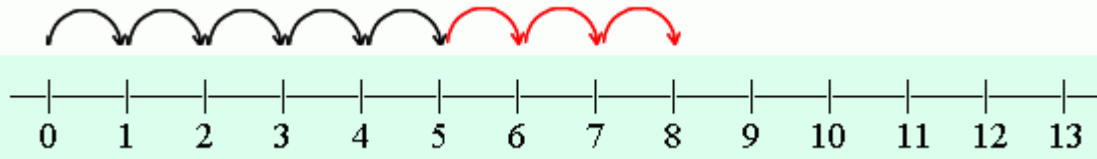


Adding On Number Line

$$5 + 3 = 8$$

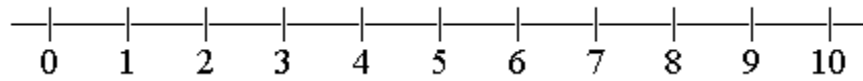


First jump 5...

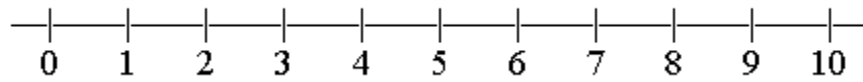
Then jump 3 more.

1. Draw jumps to illustrate the addition and find the answer.

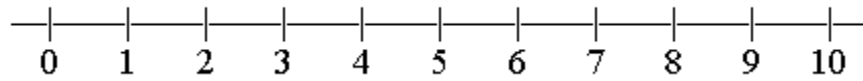
$5 + 2 = \underline{\quad}$



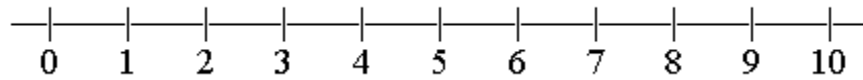
$4 + 1 = \underline{\quad}$



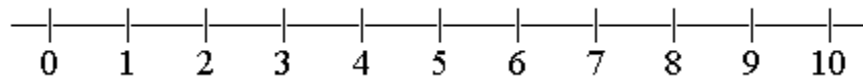
$6 + 3 = \underline{\quad}$



$9 + 1 = \underline{\quad}$



$7 + 3 = \underline{\quad}$



$4 + 3 = \underline{\quad}$

